


## Week of April 20-24 - Math Activities

### Day 1:

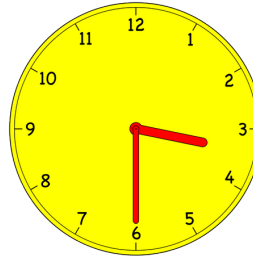
Shapes/  
Time

**Identifying shapes:** go on a shape hunt looking for 2D and 3D shapes all around you. Write down what the item is and what shape it is.

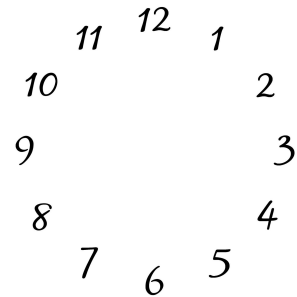
**Telling Time:** Write the time for each clock.



\_\_\_\_\_ : \_\_\_\_\_



\_\_\_\_\_ : \_\_\_\_\_



Draw the hands on the clock to show 11:00:

### Day 2:

Place Value

Using tens and ones. Show the number 76

Using tens and ones. Show the number 15

10 more than 79 \_\_\_\_\_

10 less than 79 \_\_\_\_\_

10 more than 64 \_\_\_\_\_

10 less than 64 \_\_\_\_\_

Finish counting 34, 35, \_\_\_\_\_, \_\_\_\_\_, \_\_\_\_\_, \_\_\_\_\_

Finish counting 11, 12, \_\_\_\_\_, \_\_\_\_\_, \_\_\_\_\_, \_\_\_\_\_



	<p>2. Which fruit has the least votes? _____</p> <p>3. How many students voted for grapes and bananas together? _____</p> <p>4. How many total students voted? _____</p> <p>5. How many more students chose apples than grapes? _____</p>
--	---

### **Math Websites**

[www.coolmath4kids.com](http://www.coolmath4kids.com)

[www.abcya.com](http://www.abcya.com)

[www.prodigygame.com](http://www.prodigygame.com)

[www.ixl.com](http://www.ixl.com)

[www.funbrain.com](http://www.funbrain.com)

[www.starfall.com](http://www.starfall.com)